

PRE SECONDARY SCHOLARSHIP EXAMINATION (Std. 8th), FEBRUARY 2019

Seat No.

0 2 2 2

Set

A

Paper No. II

Medium : Urdu

Time : 3:30pm to 5:00pm

Pages : 32

Third Language and Intelligence Test

Total Marks : 150

Read the following instructions carefully before you answer the questions.

- (1) This question paper contains two sections. In Section I there are 1 to 25 questions of First Language and in Section II there are 26 to 75 questions of Mathematics. All 75 questions are compulsory.
- (2) All questions carry 2 marks each.
- (3) Time limit to solve the question paper is 90 minutes.
- (4) Separate answer sheet is given to record the answers. Each question has been given four alternatives. Read them carefully. Select the correct answer and shade the correct answer in the answer sheet.

Example :- If the correct alternative for Q. No. 6 is 2, then record you answer as follows :

Question No. 6

① ● ③ ④

- (5) Answer recorded in any other form will not be considered. Such answer will be credited with 'Zero' mark.

Example : ① ② ③ ④

- (6) While recording the correct option in the answer sheet, use only black or blue ball pen. Otherwise it will be credited as 'Zero' mark.
- (7) **Answer once recorded cannot be changed.**
- (8) Maximum 20% questions are having two correct alternatives. Candidate has to darken both the circles with correct answers. These questions will have the instruction 'Select two correct alternatives.'
- (9) **Any kind of answers recorded in more than one circle will not be considered except for those questions having instruction 'Select two correct alternatives.'**
- (10) The rough work is to be done in the box given **under each page** or on the **last page** of the question paper.
- (11) The exam has limited time, in case you are not able to solve a question, kindly solve the next question. In the end if time permits you can try to solve the unsolved questions.
- (12) If you find any question incomplete or with error, then do not ask anything to the Supervisor or Centre Incharge.
- (13) For any error/mistake/objection issues, school or parents should not send written application to Block Education Officer or Education Officer. These error/mistake/objection issues should be register online through respective school login only.
- (14) The error/mistake/objection issues should be register online within 10-days from the publication of Interim answer key on MSCE website.
- (15) Questions can be cancelled due to printing mistake or any other reason, on the basis of the suggestions given by the Committee of Experts.
- (16) Along with the question paper of the respective medium, the English version of question paper is also provided. In case of doubt please refer to the English version of the same question.

Section I

3rd Language


Instruction for Q 1 and Q 2. Read the passage and answer the questions.

Look at your palm and specially the tips of your fingers closely. You will see the lines on your fingers when it is printed on the paper. It is your fingerprint !

Each person's fingerprint is unique. There are millions of people in the world but each person has a different fingerprint.

Isn't it amazing ? A cheat can copy your handwriting or your signature. But he can't copy your fingerprint. It belongs to you alone. Even police can use them to catch thieves and criminals. What other things can you think of that are unique to each person ?

1. Choose the correct option



- (1) Plam (2) Hand writing (3) Finger Print (4) Signature.

2. This passage is about person's _____.

- (1) fingerprint (2) foot print (3) paperprint (4) colourprint

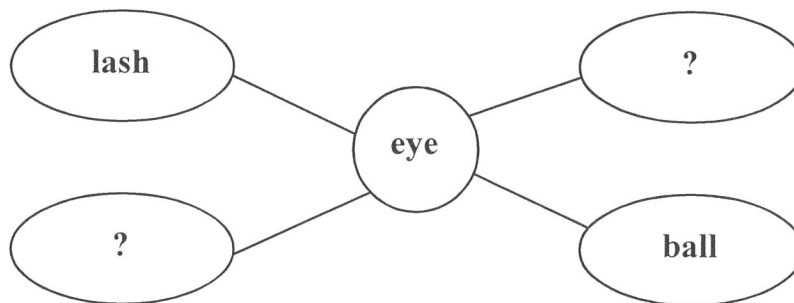
Instruction for Q.3 to Q5: Read the passage and answer the questions.

Carver wanted to help the poor farmers who had small farms in Alabama. He showed them how to get good crops. These farmers grew plants like cotton because there was profit in it. But cotton made the soil poor. Carver told them to grow crops like peanuts and beans. These crops made the soil rich again. The farmers got very good crops. In fact, the crops were so good that the farmers did not know what to do with so much of them. But carver began to look for new uses for these plants. From

Space for Rough Work

peanuts, he made suger, ink, boot-polish, colours, soup ----- as may as 300 things !
From sweet potato he made 8 things. Soon, these crops were in great demand and the farmers were happy.

3. Fill in the blanks with proper alternative _____ made soil poor.
(1) peanuts (2) beans
(3) cotton (4) sweet potato
4. What did Carver show the farmers ?
(1) To grow crops like peanuts and beans (2) To look for new crops
(3) to become happy (4) how to get good crops
5. How many things Carver made from sweet-potato ?
(1) 418 (2) 118
(3) 300 (4) 318
6. Choose the opposite meaning word for the underlined words.
Hercules was brave and strong, but his enemy was _____ and _____.
(1) deadly and difficult (2) strength and big
(3) timid and weak (4) thin and kind
7. Choose two correct alternatives to form the meaningfull words and complete the web.



- (1) lid (2) grey (3) brow (4) lead
8. Read the information carefully. Choose the specific word that is described in the clue.
'Many people believe that if a cat crosses your path, then your work will not be done. Many times people believe in things which are not really logical or resonable. It is called _____.'
(1) trust (2) fact (3) fantasy (4) superstition

Space for Rough Work

9. Choose two correct alternative to complete set of words related to oil.

C	M	O	L	I	V	E
O	S	U	J	G	Q	R
C	E	N	S	Z	D	I
O	S	N	O	T	J	C
N	A	G	T	B	A	E
U	M	P	P	C	V	R
T	E	P	L	K	N	P

- (1) RICEBRAN (2) ALMOND
 (3) SESAME (4) OLIVE

10. Choose correct alternative for underline verb.

Leelavati was fond of flowers. She loves to watch the lovely lotus that stood straight in water.

- (1) loved (2) will love
 (3) love (4) loving

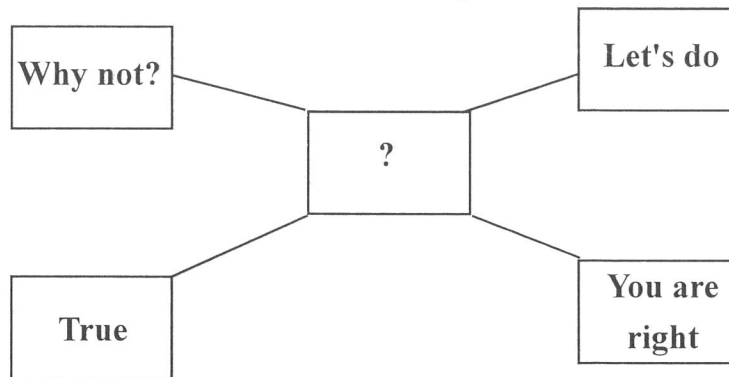
11. Choose the correct alternative to complete crossword puzzle. It is related to grains.

B		J	R	A		
		O				
		W	H	E		T
		R				

- (1) E (2) A
 (3) I (4) O

Space for Rough Work

12. Farida spoke with his friends about celebration of science day in school. Other friends expressed the views. Choose one correct option.



- (1) disagreed with Farida's opinion (2) agreed with farida's opinion
(3) angry on her (4) showed sorrow

13. Find the odd sentence out. Choose one alternative.

- (1) What hard luck ! (2) What did he do in the evening.?
(3) How did you spend your holiday? (4) How was your holiday ?

14. Choose one correct alternative.

Christina felt the cool, wet sand _____ her feet and relaxed

- (1) behind (2) in (3) into (4) beneath

15. Choose one correct conjunction to join two sentences.

She stopped running. She was tired.

- (1) but (2) and (3) because (4) if

16. Choose one correct alternative.

He _____ moved to see the ill man lying helpless by the side of the road.

- (1) will (2) was (3) can (4) were being

17. Identify the tense in the following sentence. Choose one correct alternative.

The bell had already rung when I reached to school.

- (1) present perfect (2) future perfect (3) simple past tense (4) past perfect

Space for Rough Work

18. Choose one correct alternative which have similar meaning in the sentence given.

'The Prime Minister is going to visit Australia next week.'

- (1) The Prime Minister will visit Australia next week.
- (2) The Prime Minister could visit Australia next week.
- (3) The Prime Minister must visit Australia next week
- (4) The Prime Minister may visit Australia next week

19. Complete the sentence using correct alternative

Sunil asked, "What can we do ?"

Sunil asked what _____.

- (1) they can do. (2) they could do, (3) we can do. (4) we could do.

20. Choose the correct option.

Dear Soldiers,

You sacrifice so much to keep our country safe. Thank you for your bravery. Thank you for your dedication and your service to our country. You all are our heroes. Once again thank you to you all.

What is this note is all about _____

- (1) invitation (2) permission (3) thanks giving (4) request

21. Form the sentence of superlative degree by choosing the correct option.

The most precious gold metal

- (1) Gold is not the most precious metal (2) Gold is the most precious than any other metal.
- (3) No other gold is the most precious metal (4) Gold is the most precious metal

22. My friend left me a message. I can't guess the meaning of it. Can you ?

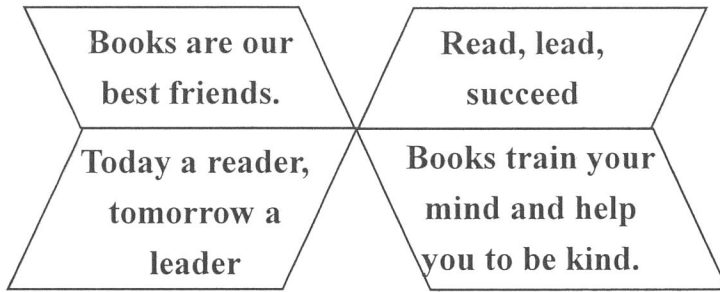
Sun smiles 4 u trees dance 4 u birds sing 4 u And this is the birthday note 4 u
--

The number '4' in this message indicates _____.

- (1) four (2) for (3) fortune (4) forward

Space for Rough Work

23. Choose two options which related with the given slogans.



- (1) importance of reading books
- (2) ways of kindness
- (3) Keys to success
- (4) benefits of reading books.

24. Read conversation between the librarian and the student. Choose the correct option and complete it.

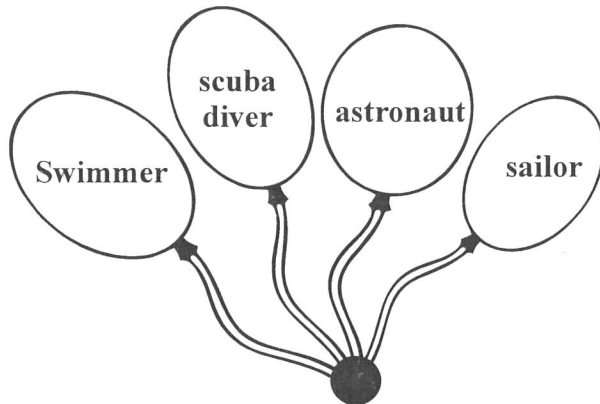
Student: Can you _____ me the Oxford dictionary ?

Librarian : Sorry ! It's _____ to someone

Student : No problem. I'll take it some other time.

- (1) see, wipe
- (2) lend, brought
- (3) sell, expensive
- (4) lend, issued

25. Find the odd baloon from the following.



- (1) swimmer
- (2) scuba diver
- (3) astronaut
- (4) sailor

Space for Rough Work

حروف : ABCDE FGHIJ KLMNO PQRST UVWXYZ

حصہ II


زبانِ اول

26. ا، م، ن، ی، ر، ی، س، ان حروف کی مدد سے ایک بامعنی لفظ تیار کیا جائے تو اس لفظ کے درمیانی حرف کے دائیں جانب سے دوسرے نمبر پر کون سا حرف آئے گا؟


(1) ا (2) ی (3) ر (4) ن

27. 31 تا 30 کے لئے ہدایت:- گروہ سے تعلق نہ رکھنے والا رکن متبادل میں سے تلاش کیجئے۔


(1) روم (2) برلین (3) ہمبرگ (4) میونخ




(1)



(2)

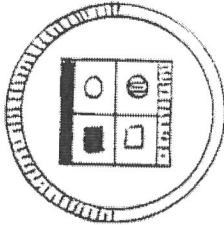


(3)

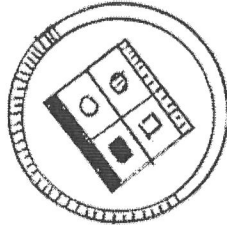


(4)


28.




(1)



(2)



(3)



(4)

29.

8729 (4)

5549 (3)

5357 (2)

7213 (1) 30.

FH (4)

DL (3)

BX (2)

CO (1) 31.

Space for Rough Work

Section II

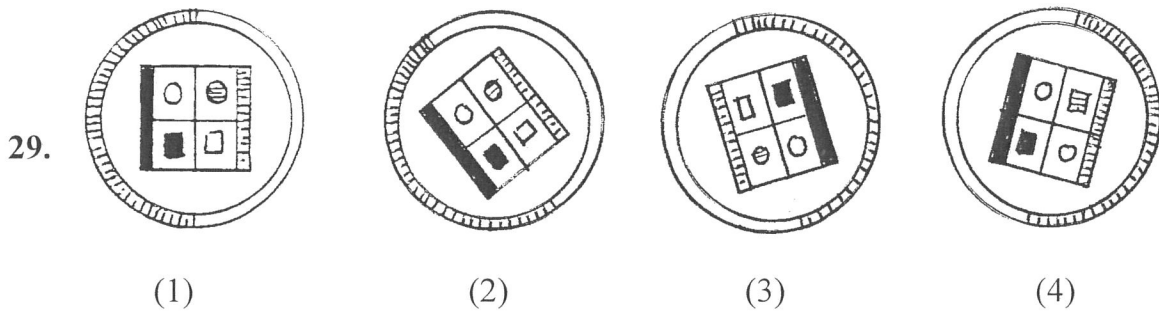
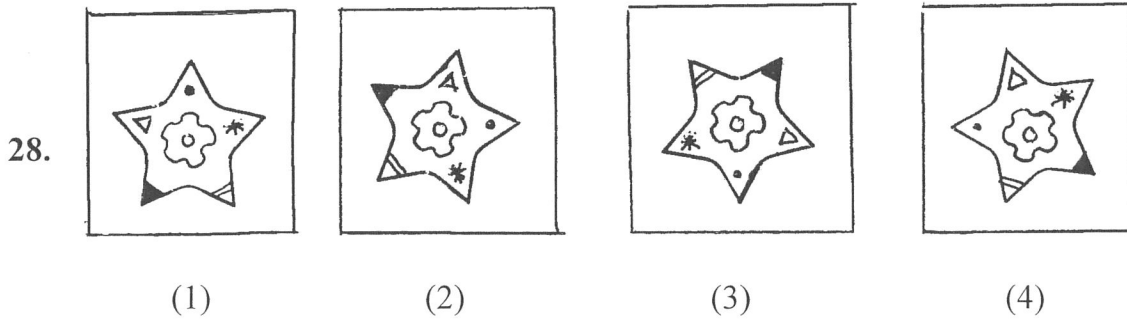
Intelligence Test

26. I, R, G, E, M, I, N, A, T, N, O from the given letters form a meaningful word and find out the second letter to the right of the middle letter.

- (1) M (2) T (3) R (4) I

Instructions for Q 27 to Q 31. Find the odd term.

27. (1) Rome (2) Berlin (3) Hamburg (4) Munich



30. (1) 7213 (2) 5357 (3) 5549 (4) 8729

31. (1) CO (2) BX (3) DL (4) FH

Space for Rough Work

حروف : ABCDE FGHIJ KLMNO PQRST UVWXYZ

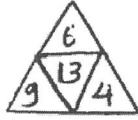
32. 'الف' کی عمر 'ج' کی عمر سے دو گنا مگر 'ب' کی عمر کے $\frac{3}{2}$ گنا ہے۔ ان کی عمروں کا مجموعہ 52 سال ہو تو 'ج' اور 'ب' کی عمروں کا تناسب معلوم کیجئے۔

(1) 3:4 (2) 3:2 (3) 2:5 (4) 5:3

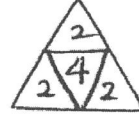
33. دیئے گئے عددوں کی ترتیب پہچان کر سوالیہ علامت کی جگہ آنے والے دو صحیح متبادل پہچانئے۔



(4) $\sqrt{91}$



(3) 9

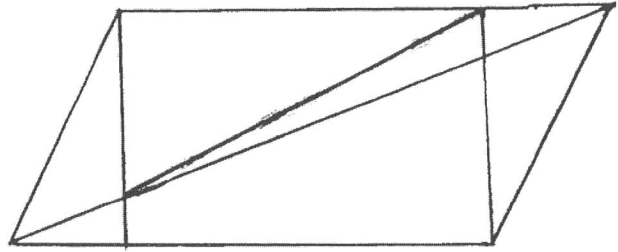


(2) 3



(1) $\sqrt{9}$

34. بازو کی شکل میں کل کتنے مثلث ہیں؟



(1) 11 (2) 28 (3) 12 (4) 13

35 تا 39 کے لئے ہدایت:-

ذیل کے سوالوں میں پہلے رکن کا دوسرے رکن سے جیسا تعلق ہے ویسا ہی تعلق تیسرے رکن کا چوتھے رکن سے ہے۔ یہ دھیان میں رکھتے ہوئے سوالیہ علامت کی جگہ کون سا متبادل آئے گا؟ وہ پہچانئے۔

35. منشی پریم چند : میدانِ عمل :: ؟ : شریف زادہ

(1) حامد اللہ انصاری (2) علامہ شبلی (3) مرزا محمد ہادی رسوا (4) مولانا الطاف حسین حالی

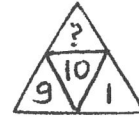
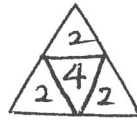
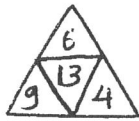
Space for Rough Work

Alphabets : ABCDE FGHIJ KLMNO PQRST UVWXYZ

32. Age of A is double of age of C but $\frac{3}{2}$ times that of B. If sum of their ages is 52 years then what is the ratio of the ages of C and B ?

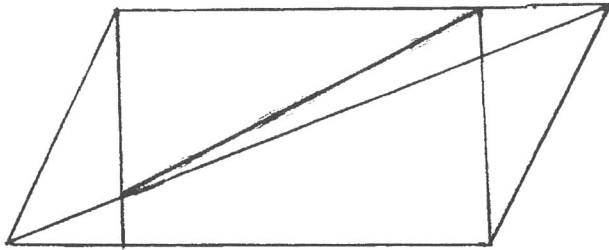
- (1) 3:4 (2) 3:2
(3) 2:5 (4) 5:3

33. Identify the rule underlying sequence and determine the number in place of the question marks. (Select two correct alternatives)



- (1) $\sqrt{9}$ (2) 3 (3) 9 (4) $\sqrt{91}$

34. How many triangles are there in the given figure ?



- (1) 11 (2) 28 (3) 12 (4) 13

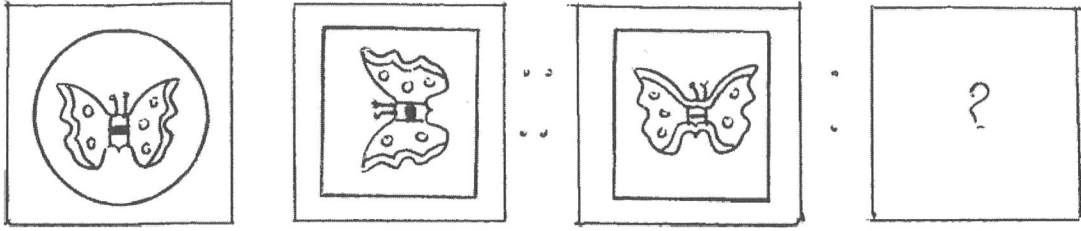
35. Gavathphula Re Gavathphula : Indira Sant :: Chaitrapadva : ?

- (1) Ashok Thorat (2) Shankar Vaidya
(3) Mangala Gokhale (4) Keshav Sut

Space for Rough Work

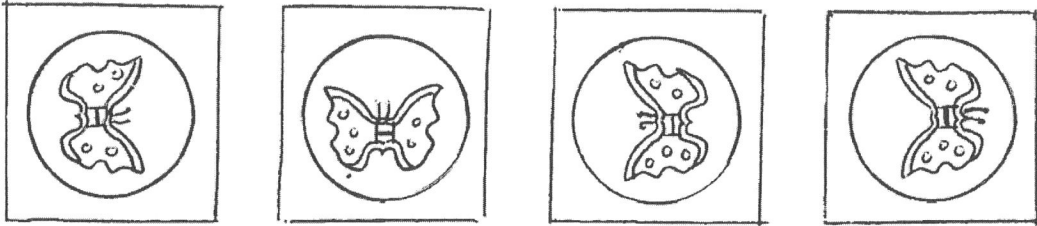
حروف : ABCDE FGHIJ KLMNO PQRST UVWXYZ

سوالیہ شکلیں



36.

جوابی شکلیں



(1)

(2)

(3)

(4)

37. 17 : 297 :: 13 : ؟ (دو صحیح متبادل کی شناخت کیجئے)

165 (4)

173 (3)

182 (2)

177 (1)

38. 22 : 462 :: ؟ : 756

28 (4)

27 (3)

24 (2)

29 (1)

39. $\frac{J}{E} : \frac{T}{J} :: \frac{L}{F} : ?$ (دو صحیح متبادل کی شناخت کیجئے)

$\frac{X}{M}$ (4)

$\frac{N}{G}$ (3)

$\frac{X}{L}$ (2)

$\frac{R}{F}$ (1)

40. ایک قطار میں درمیان میں کھڑے ہوئے اکبر کے دائیں جانب ساتویں مقام پر عابدیہ رفیق کے بائیں جانب 12 ویں مقام پر کھڑا ہے تو قطار میں کم سے کم کتنے لڑکے کھڑے ہیں؟

15 (4)

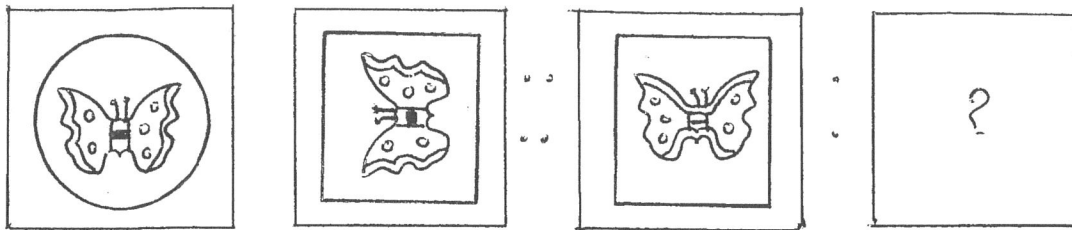
19 (3)

17 (2)

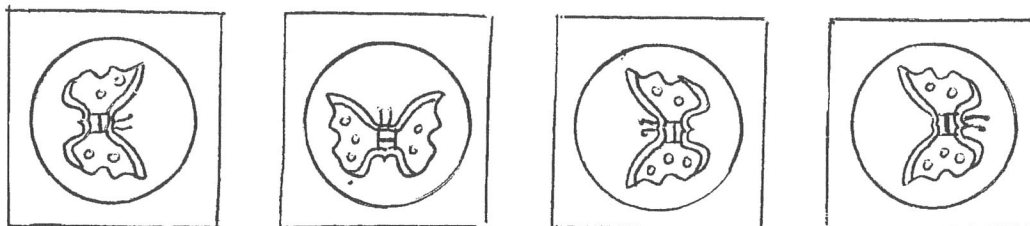
13 (1)

Space for Rough Work

36. Question Figures



Answer Figures



(1)

(2)

(3)

(4)

37. 17 : 297 :: 13 : ? (Select two correct alternatives)

(1) 177

(2) 182

(3) 173

(4) 165

38. 22 : 462 :: ? : 756

(1) 29

(2) 24

(3) 27

(4) 28

39. $\frac{J}{E} : \frac{T}{J} :: \frac{L}{F} : ?$ (Find out two correct alternatives)

(1) $\frac{R}{F}$

(2) $\frac{X}{L}$

(3) $\frac{N}{G}$

(4) $\frac{X}{M}$

40. To the left of Rakesh at 12th place Ajay is standing who is at 7th place to the right of Amar who is exactly at the middle place in the row. Find the minimum number of boys standing in the row.

(1) 13

(2) 17

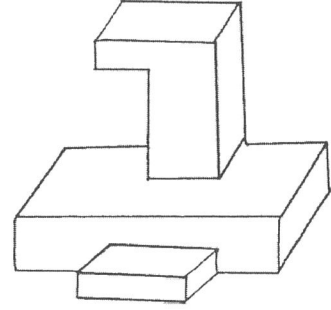
(3) 19

(4) 15

Space for Rough Work

حروف : ABCDE FGHIJ KLMNO PQRST UVWXYZ

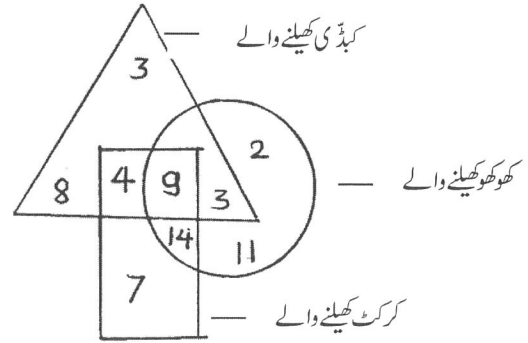
41. ذیل کی شکل میں لکڑی کے کُندے کی کُل کتنی سطح ہیں؟



18 (4) 17 (3) 15 (2) 16 (1)

42 تا 43 کے لئے ہدایت :-

مندرجہ ذیل میں دی گئی شکل کا بغور مشاہدہ کرتے ہوئے پوچھے گئے سوالوں کے جواب متبادل میں سے تلاش کیجئے۔



42. صرف دو ہی کھیل کھیلنے والے کتنے کھلاڑی ہیں؟

16 (4) 21 (3) 9 (2) 26 (1)

43. کھوکھو کھیلنے والے ایسے کتنے کھلاڑی ہیں جنہیں کبڈی کھیلنے کے لئے نہیں آتا ہے؟

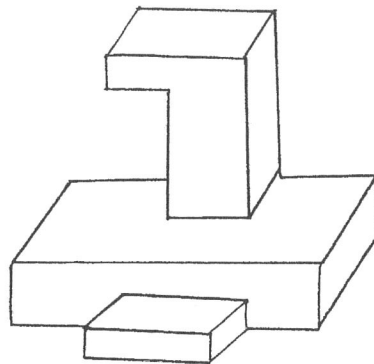
13 (4) 16 (3) 27 (2) 20 (1)

44. ایک لیپ سال کی شروعات اتوار سے ہوئی تو 15 مئی سے 18 روز چھٹی پر گیا ہوا عثمان کون سے دن کام پر حاضر ہوگا؟

پیر (4) جمعہ (3) اتوار (2) سنیچر (1)

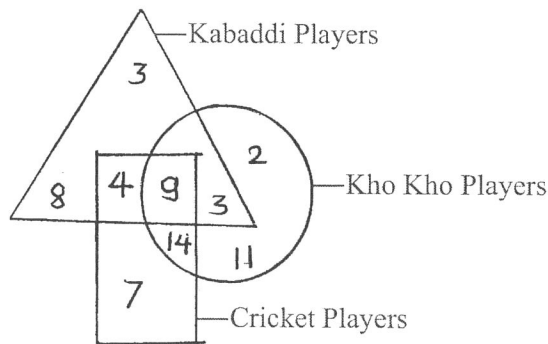
Space for Rough Work

41. How many faces are there in the following figure ?



- (1) 16 (2) 15 (3) 17 (4) 18

Instruction for Q. 42 & Q. 43.



42. How many players play only two games ?
 (1) 26 (2) 9 (3) 21 (4) 16
43. How many Kho-Kho players can not play Kabaddi ?
 (1) 20 (2) 27 (3) 16 (4) 13
44. A leap year starts from Sunday on which day Santosh will resume his duty if he has taken 18 days leave from 15th May ?
 (1) Saturday (2) Sunday (3) Friday (4) Monday

Space for Rough Work

حروف : ABCDE FGHIJ KLMNO PQRST UVWXYZ

45. دیئے گئے چوکون میں سوالیہ علامت کی جگہ کون سا عدد آئے گا؟

5	3	6
51	39	6
8	7	?

2 (4) 9 (3) 6 (2) 4 (1)

46 تا 50 کے لئے ہدایت :-

ذیل میں دیئے گئے کئی سلسلوں کی ترتیب دھیان میں رکھتے ہوئے سوالیہ علامت کی جگہ آنے والا رکن متبادل سے پہچانیے۔

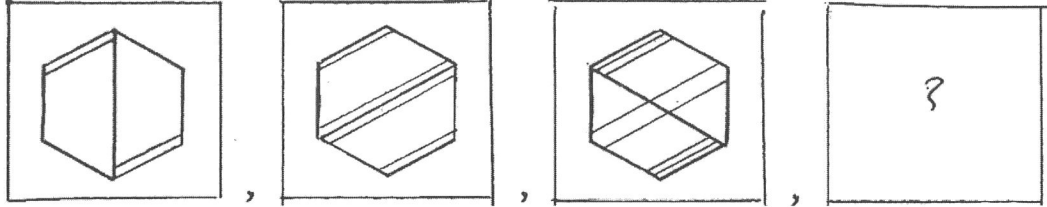
0, 4, 18, ?, 100, 180, 294 46.

48 (4) 32 (3) 58 (2) 42 (1)

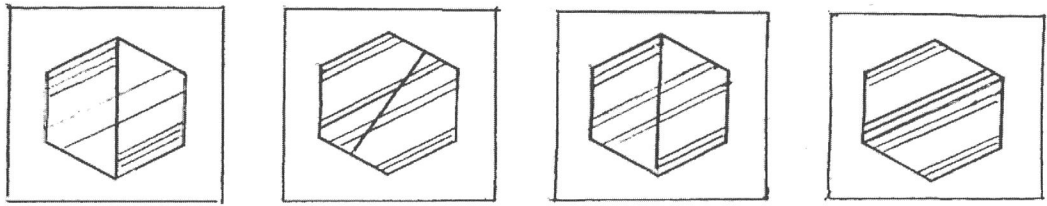
6, -1, 14, 11, 30, 31, ? 47.

49 (4) 44 (3) 54 (2) 45 (1)

48. سوالیہ شکلیں



جوابی شکلیں



(1)

(2)

(3)

(4)

Space for Rough Work

45. Find out the number which will replace the question mark in the given square ?

5	3	6
51	39	6
8	7	?

- (1) 4 (2) 6 (3) 9 (4) 2

Q 46 to Q 50 Instructions : A series of numbers/figures/symbols/letters is given below Determine the rule underlying the series and find out the term in place of the question mark.

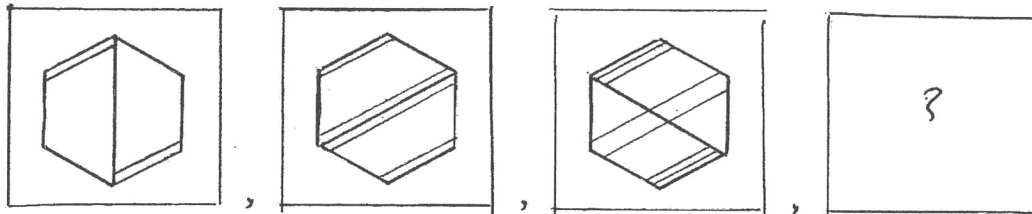
46. 0, 4, 18, ?, 100, 180, 294

- (1) 42 (2) 58 (3) 32 (4) 48

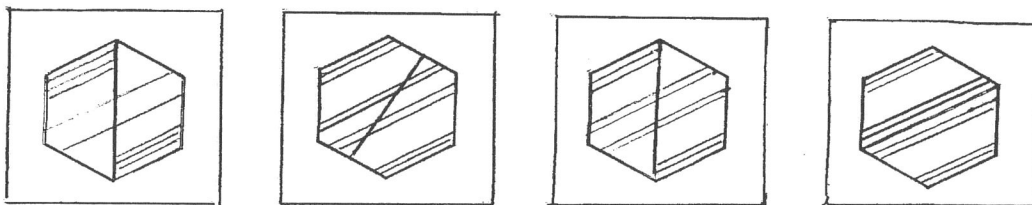
47. 6, -1, 14, 11, 30, 31, ?

- (1) 45 (2) 54 (3) 44 (4) 49

48. Question figures



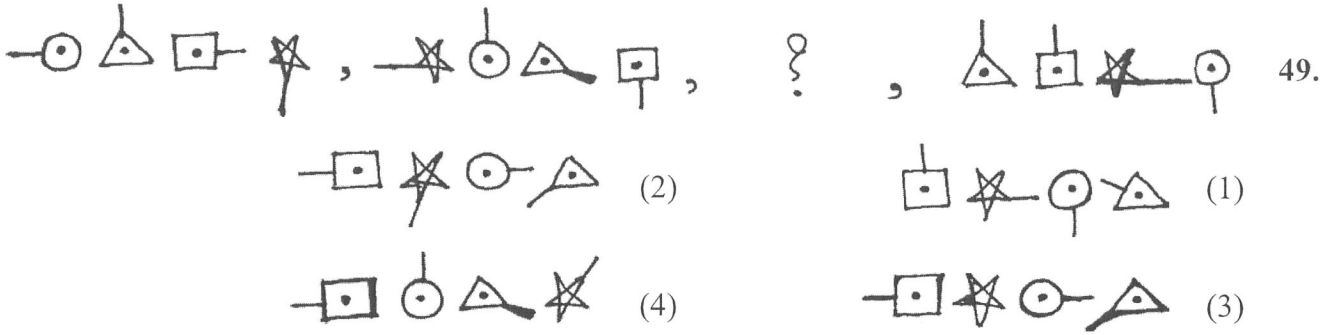
Answer figures



- (1) (2) (3) (4)

Space for Rough Work

حروف : ABCDE FGHIJ KLMNO PQRST UVWXYZ



ABCDE FGHIJ KLMNO PQRST UVWXYZ 50.

(دو صحیح متبادل کی شناخت کیجئے) RLF , OJE , LHD , IFC , ?

FDB (4)

FED (3)

FCA (2)

UNG (1)

51. ذیشان جنوب مغرب کی طرف مہ کر کے کھڑا تھا۔ سامنے سے آیا ہوا عمر دومرتبہ خود کے دائیں جانب زاویہ قائمہ بنانا ہوا مڑا تو اس کے بائیں ہاتھ کے جانب کون سی سمت ہوگی؟

مشرق (4)

جنوب مغرب (3)

مغرب (2)

جنوب مشرق (1)

52. 8 بج کر 20 منٹ پر گھڑی کے منٹ اور گھنٹے کی سوئیوں میں کتنے درجے کا زاویہ ہوتا ہے؟

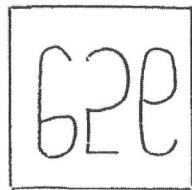

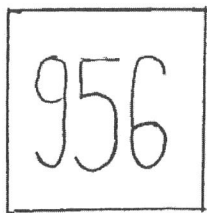
130° (4)

110° (3)

125° (2)

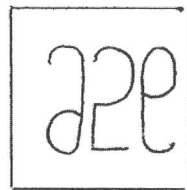
115° (1)

سوالیہ شکلیں



(1)


جوابی شکلیں



(2)






(3)



(4)

Space for Rough Work

49. 

- (1)  (2) 
- (3)  (4) 

50. ABCDE FGHIJ KLMNO PQRST UVWXY

RLF, OJE, LHD, IFC, ? (Select two correct alternatives)

- (1) UNG (2) FCA (3) FED (4) FDB

51. Atul and Arun are standing face to face. Atul faces South-West direction. Arun turns to his right two times in 90°. Which direction will be on the left of Arun ?

- (1) South East (2) West (3) South West (4) East

52. At 8.20 what will be the measure of the angle between minute hand and hour hand of clock ?




- (1) 115° (2) 125° (3) 110° (4) 130°

53. What will be the water image of the given figure ?

In the following question, a question figure is given below. Identify the water reflection of that figure and select the correct alternative.

Question figure

Answer figures



- (1) (2) (3) (4)


Space for Rough Work

حروف : ABCDE FGHIJ KLMNO PQRST UVWXYZ

54 تا 55 کے لئے ہدایت :-

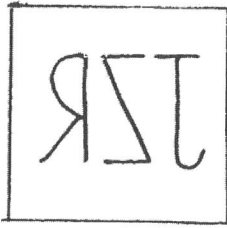
ذیل کی سوالیہ شکل کا آئینے میں عکس کس طرح نظر آئے گا؟ متبادل سے پہچانئے۔

سوالیہ شکل

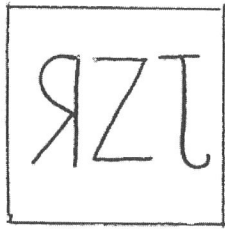


54.


جوابی شکلیں




(1)



(2)




(3)




(4)

سوالیہ شکل


55.




جوابی شکلیں




(1)



(2)



(3)



(4)

Space for Rough Work

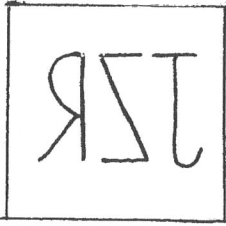
Alphabets : ABCDE FGHIJ KLMNO PQRST UVWXYZ

Instructions for Q. no. 54 and Q. no. 55 for the given question figures choose the correct mirror image from the alternatives.

54. Question figure




Answer figures




(1)



(2)



(3)




(4)


55. Question figure




Answer figures




(1)



(2)



(3)



(4)

Space for Rough Work

حروف : ABCDE FGHIJ KLMNO PQRST UVWXYZ

56. مندرجہ ذیل میں دو بیانات اور دو نظریے دئے گئے ہیں۔ اس بناء پر صحیح متبادل کی شناخت کیجئے۔

بیانات : (الف) تمام اساتذہ فن کار ہوتے ہیں۔

(ب) کچھ فن کار خوش رہتے ہیں۔

نظریے : (ج) تمام اساتذہ خوش رہتے ہیں۔

(د) خوش رہنے والے تمام افراد فن کار ہوتے ہیں۔

(1) صرف 'ج' صحیح ہے

(2) 'ج' اور 'د' دونوں غلط ہیں

(3) صرف 'د' صحیح ہے

(4) 'ج' اور 'د' دونوں صحیح ہیں

57 تا 59 کے لئے ہدایت :-

ذیل میں دئے گئے حرفوں، علامتوں اور عددوں کی سلسلہ وار ترتیب کی بناء پر خالی جگہ آنے والے حرفوں، علامتوں اور عددوں کا گروہ متبادل میں سے تلاش کیجئے۔

57. p __ qdl __ lbq __ __ ldbqpl __ qb

(2) bpbpd

(1) bqdpd

(4) bpdpd

(3) bbppd

58. □ ▽ ☆ ✱ ✕ _ ○ _ ✱ ☆ ▽ _ □ _ ☆ ✱ ✕ ○ ○ ✕ ✱ _ ▽ □

(2) ○ ▽ □ ✕ □

(1) ○ ✕ ▽ □ □

(4) ○ ○ ✕ □ ☆

(3) ○ ✕ □ ▽ ☆

59. 23 __ 6692 __ 466923466 __ 234 __ 69234

(2) 6394

(1) 4396

(4) 2346

(3) 4433

Space for Rough Work

Alphabets : A B C D E F G H I J K L M N O P Q R S T U V W X Y Z

56. Two statements and two conclusions are given below. Find out the suitable alternative.

Statements : (A) All teachers are artists.

(B) Few artists live happily.

Conclusions : (c) All teachers live happily.

(d) All those who live happily are artists.

Alternatives

(1) Only 'C' true

(2) 'C' and 'D' both false

(3) Only 'D' true

(4) 'C' and 'D' both true

Instruction for Q. no. 57 to Q. no. 59. Arrange the given letters/signs/numbers in series and find out the suitable letters/signs/numbers replacing the blanks.

57. p _ qdl _ lbq _ _ ldbqpl _ qb

(1) bqdpd

(2) bpbpd

(3) bbppd

(4) bpdpd

58. □ ▽ ☆ ✱ ✕ _ ○ _ ✱ ☆ ▽ _ □ _ ☆ ✱ ✕ ○ ○ ✕ ✱ _ ▽ □

(1) ○ ✕ ▽ □ □

(2) ○ ▽ □ ✕ □

(3) ○ ✕ □ ▽ ☆

(4) ○ ○ ✕ □ ☆

59. 23 _ 6692 _ 466923466 _ 234 _ 69234

(1) 4396

(2) 6394

(3) 4433

(4) 2346

Space for Rough Work

حروف : ABCDE FGHIJ KLMNO PQRST UVWXYZ

60 تا 62 کے لئے ہدایت :-

ذیل کے عددوں اور حروف کی ترتیب کا مشاہدہ کر کے سوالوں کے ارکان میں آنے والے عددوں اور حروف کا مقام دھیان میں رکھتے ہوئے سوالیہ علامت کی جگہ آنے والا رکن پہچانئے۔

y	x	w	v	u	t	s	r	q
20	19	18	17	16	15	14	13	
j	k	l	m	n	o	p		
	7	8	9	10	11	12		
		i	h	g	f	e		
			6	5	4	3		
				b	c	d		
					1	2		
						a		

60. tofmc : ؟ :: spend : wjilb

v-k-8-17-5 (4) vkhmc (3) unglh (2) vkmhb (1)

61. e-o-m-10-5 : i-k-m-9-4 :: ؟ : j-x-v-18-9

p-r-t-16-11 (4) p-r-s-14-11 (3) p-r-t-15-10 (2) p-r-t-n-g (1)

62. ؟ : b-l-j-20-x :: 3-15-13-p-14 : 6-18-20-j-19

d-n-p-13-e (4) d-n-p-13-g (3) d-h-p-12-r (2) d-n-p-13-r (1)

63. عبد الجلیل، عبداللطیف، نور الدین، عبدالرشید اور نور العین ایک ہی جماعت میں پڑھتے ہیں۔

مندرجہ ذیل جملے میں حروف حمزہ کی تعداد بتائیے۔

2 (4) 4 (3) 3 (2) 5 (1)

64. حروفی سلسلہ ABCDE FGHIJ KLMNO PQRST UVWXYZ

دئے گئے حروفی سلسلے کو الٹی ترتیب میں لکھا جائے تو NIGHT اس لفظ کے متضاد لفظ میں حروفوں کے نمبر کا گروہ دیے گئے متبادل میں سے کون سا ہوگا؟

12, 17, 19, 18, 6 (4) 22, 25, 1 (3) 14, 17, 19, 18, 6 (2) 25, 21, 22 (1)

Space for Rough Work

Alphabets : ABCDE FGHIJ KLMNO PQRST UVWXYZ

Q 60 to Q 62 : Observe the following pyramid and choose the correct alternative to replace the question mark.

y x w v u t s r q
20 19 18 17 16 15 14 13
j k l m n o p
7 8 9 10 11 12
i h g f e
6 5 4 3
b c d
1 2
a

60. wjilb : spend :: ? : tofmc

(1) vkmhb (2) unglh (3) vkhmc (4) v-k-8-17-5

61. j-x-v-18-9 : ? :: i-k-m-9-4 : e-o-m-10-5

(1) p-r-t-n-g (2) p-r-t-15-10 (3) p-r-s-14-11 (4) p-r-t-16-11

62. 6-18-20-j-19 : 3-15-13-p-14 :: b-l-j-20-x : ?

(1) d-n-p-13-r (2) d-n-p-12-r (3) d-n-p-13-g (4) d-n-p-13-e

63. 'This year on the occasion of 'Reading Inspiration Day' it has been resolved to read thousand books. In the given sentence how many times the 5th letter of English alphabet is repeated ?

(1) 6 (2) 4 (3) 8 (4) 7

64. Alphabet series : ABCDE FGHIJ KLMNO PQRST UVWXY

If the given letter series is written in reverse order, then which alternative gives the correct numbers that indicate the word which is antonym of the word "NIGHT" ?

(1) 25, 21, 22 (2) 14, 17, 19, 18, 6 (3) 22, 25, 1 (4) 12, 17, 19, 18, 6

Space for Rough Work

حروف : ABCDE FGHIJ KLMNO PQRST UVWXYZ

65. دئے گئے حروفی سلسلے میں ہر گروہ کے دوسرے اور چوتھے حروفوں کو لے کر نیا حروفی سلسلہ تیار کیا جائے تو دونوں جانب سے مساوی فاصلے پر آنے

والے حروفوں کی جوڑی کون سی ہوگی؟ (دو صحیح متبادل کی شناخت کیجئے)

QL (4) IN (3) GS (2) LN (1)

66. 'عالم نے مدعی سے بیش بہا ہیرے کی حقیقت پوچھی۔'

مندرجہ بالا جملے میں لفظوں کے مجموعے کے لئے لفظ استعمال کئے گئے ہیں۔ متبادل میں سے ایسا کون سا لفظوں کا مجموعہ ہے جس کا استعمال جملے میں نہیں کیا گیا ہے؟

(1) علم جاننے والا (2) دعویٰ کرنے والا (3) بہت قیمت والا (4) عمل کرنے والا

67. ذیل کے ارکان میں غلط رکن پہچانئے۔ (دو صحیح متبادل کی شناخت کیجئے)

20, 39, 56, 69, 81, 87, 92, 95, 96

81 (4) 87 (3) 56 (2) 96 (1)

68. ذیل کے چوکون میں علامتوں کے لئے اعداد دیئے گئے ہیں۔

□	○	△	▽	▽	*	*	●	■	△	⊙	△	□	▲
16	15	14	13	12	11	10	9	8	7	6	5	4	3

$$\left[\left(\frac{\text{▽}}{\text{□}} \right) \div \left(\frac{\text{△}}{\text{○}} \right) \right] + \left(\frac{\text{□}}{\text{□}} \right) = ?$$

(1) ▽ (2) ▽ (3) ○ (4) △

69. جماعت میں گروپ لیڈر نے ہدایت دیتے وقت سُنو کی بجائے 'V' لکھنے کے بجائے 'B' پڑھنے کی بجائے 'O'، اٹھنے کی بجائے 'L' اور

بیٹھنے کی بجائے 'A' ان حروفوں کا استعمال کیا ہے۔ اس بنا پر ایک گروہی کام کرتے وقت اس نے ذیل کے مطابق ہدایت دی تو اس گروپ میں طالب علموں نے سب سے زیادہ کون سا کام کیا ہے؟

BVOLBVVALBVBLAVOBVVOVB

(1) پڑھو (2) لکھو (3) سُنو (4) بیٹھو

Space for Rough Work

65. From the given alphabet series, if a new series is formed by taking 2nd and 4th letter of each group then find the pairs of letters which are at the same distance from both side. (Find two correct alternatives)

- (1) LN (2) GS (3) IN (4) QL

66. 'A generous man started a free mess with water facility for the orphans.' In the given sentence for which group of words one word is not there.

- (1) Having no parents (2) A person who is kind
 (3) A place where food is available (4) A person who is very sensible

67. Find the odd term. (Select two correct alternatives).

20, 39, 56, 69, 81, 87, 92, 95, 96

- (1) 96 (2) 56 (3) 87 (4) 81

68. In the table below numbers are given to different symbols.

16	15	14	13	12	11	10	9	8	7	6	5	4	3

Solve : $\left[\left(\frac{\text{inverted triangle with dot}}{\text{square with dot}} \right) \div \left(\frac{\text{triangle with dot}}{\text{circle}} \right) \right] + \left(\frac{\text{square}}{\text{square with dot}} \right) = ?$

- (1) (2) (3) (4)

69. The monitor of the class instructed the students, in a specific manner. He used letter 'A' for listening, B for writing, C for reading, D to stand up and E to sit down. Observe the following series of instruction given by the monitor and find out the action done for the maximum number of times by the students.

B A C D B A A E D B A B D E A C B A C C A B

- (1) Read (2) Write (3) Listen (4) Sit down

Space for Rough Work



حروف : ABCDE FGHIJ KLMNO PQRST UVWXYZ

70. ایک اشاراتی زبان میں POT یہ لفظ PUOPTQ ایسا، OUT یہ لفظ OUUVTP ایسا اور TEN یہ لفظ TOEFNU


لکھا جائے تو CUT یہ لفظ کیسا لکھا جائے گا ؟

(1) CDUVTU (2) CUUDTV (3) CUUVTD (4) CSUTTB

71. ذیل کی سوالیہ شکل مکمل کرنے کے لئے مناسب متبادل پہنچائے۔




(1)



(2)



(3)





(4)


72 تا 73 کے لئے ہدایت :-

ذیل کی سوالیہ سے ہو، ہو ملنے والی شکل کون سی ہے؟


سوالیہ شکل




(1)



(2)



(3)


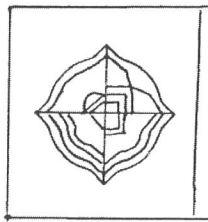


(4)

جوابی شکلیں

72.

سوالیہ شکل



(1)

(2)

(3)

(4)

73.

Space for Rough Work


Alphabets : A B C D E F G H I J K L M N O P Q R S T U V W X Y Z

70. In a code language if POT is written like PUOPTQ, OUT is written as OUUVTP and TEN like TOEFNU, then how the word CUT will be written ?

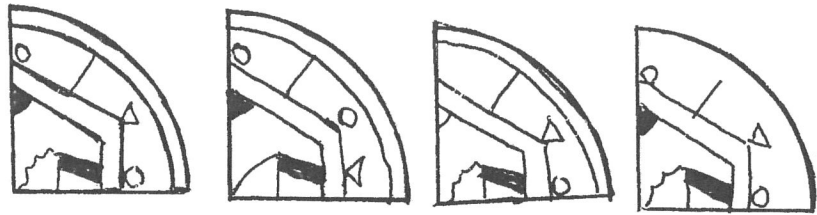
- (1) CDUVTU (2) CUUDTV (3) CUUVD (4) CSUTTB

71. To complete the question figure. Choose the correct alternative.

Question figure




Answer figures




- (1) (2) (3) (4)

Instructions for Q 72 and Q 73. Choose the figure which completely resembles the question figure.

72. Question figure

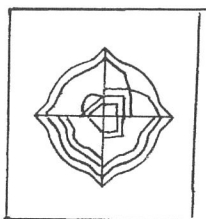


Answer figures




- (1) (2) (3) (4)

73. Question figure



Answer figures



- (1) (2) (3) (4)

Space for Rough Work

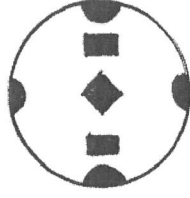
حروف : ABCDE FGHIJ KLMNO PQRST UVWXYZ

74. سوالیہ شکل میں کاغذ کو ذیل کے مطابق ہتہ کر کے سایہ زدہ حصہ کاٹ لیا جائے تو ہتہ کھولنے کے بعد کاغذ پر وہ کس طرح نظر آئے گا؟

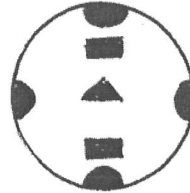
سوالیہ شکل



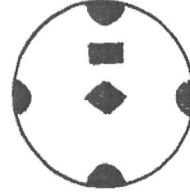
جوابی شکلیں




(1)



(2)



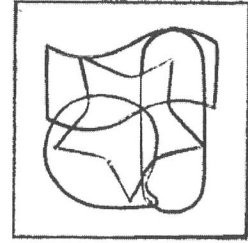
(3)



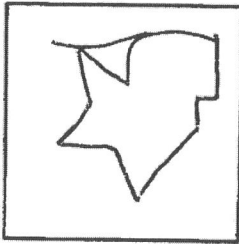
(4)

75. ذیل کی سوالیہ شکل میں متبادل میں سے کون سی شکل چھپی ہوئی ہے؟

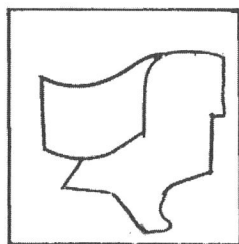
سوالیہ شکل



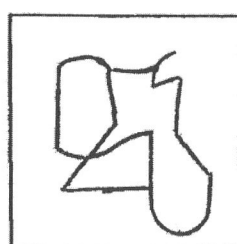
جوابی شکلیں




(1)



(2)



(3)




(4)


Space for Rough Work

74. A piece of paper is folded and cut on the shaded part as shown in the question figure. How would the paper look like when unfolded ?

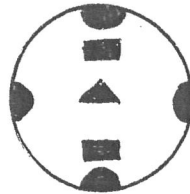
Question figure



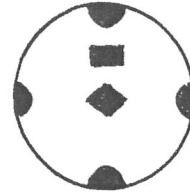
Answer figures



(1)



(2)



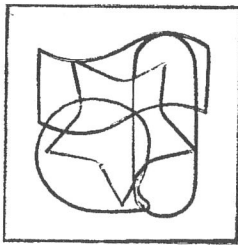
(3)



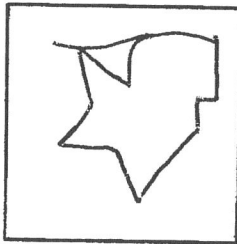
(4)

75. In the following question, a complex figure is given. Find out which of the simple figure given in the alternatives is hidden in the complex figure.

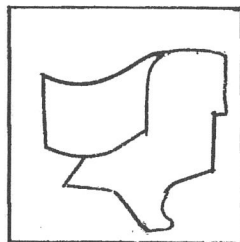
Question figure



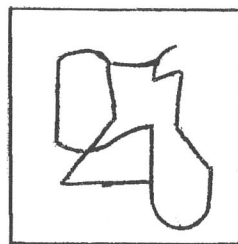
Answer figures




(1)



(2)



(3)



(4)

Space for Rough Work

Space for Rough Work