

पूर्व माध्यमिक शिष्यवृत्ती परीक्षा ( इयत्ता 8वी ) फेब्रुवारी 2020

वेतक क्र.

--	--	--	--	--	--	--	--	--	--

0 1 2 2

संच

A

वेतक क्र. II

पृष्ठ : 32

माध्यम : मराठी  
तृतीय भाषा व बुद्धिमत्ता चाचणी

वेळ : 1.30 ते 3.00

एकूण गुण : 150

प्रश्नपत्रिका सोडविण्यापूर्वी कृपया खालील सूचना काळजीपूर्वक वाचा:

- (1) या प्रश्नपत्रिकेत दोन विभाग आहेत. त्यापैकी विभाग I मध्ये तृतीय भाषा विषयासाठी 1 ते 25 व विभाग II मध्ये बुद्धिमत्ता चाचणी विषयासाठी 26 ते 75 असे एकूण 75 प्रश्न आहेत. सर्व प्रश्न सोडविणे आवश्यक आहे.
- (2) प्रत्येक प्रश्नासाठी 2 गुण आहेत.
- (3) प्रश्नपत्रिका सोडविण्यासाठी एकूण 90 मिनिटांचा कालावधी दिला जाईल.
- (4) उत्तरे नोंदविण्यासाठी स्वतंत्र उत्तरपत्रिका दिलेली आहे. प्रत्येक प्रश्नक्रमांकासमोर चार पर्यायासाठी क्रमागत चतुर्भुज दिलेली आहेत. त्यातील अचूक उत्तराचा पर्याय क्रमांक असलेल चतुर्भुज पुढील उदाहरणात दाखविल्याप्रमाणे रंगा. उदा. प्रश्न क्र. 6 च्या बरोबर उत्तराचा पर्याय क्र. 2 असेल. तर तो पुढीलप्रमाणे नोंदवावा.  
प्रश्न क्र. 6                      ①●③④
- (5) खालीलप्रमाणे नोंदविलेली उत्तरे ग्राह्य धरण्यात येणार नाहीत. असे उत्तर नोंदविल्यास त्या प्रश्नास 'शून्य' गुण दिले जातील.  
①②③④
- (6) प्रश्नपत्रिकेत कमाल 20% प्रश्नांच्या बाबतीत उत्तराच्या चार पर्यायांपैकी दोन पर्याय अचूक असतील. ते दोन्ही पर्याय नोंदविणे बंधनकारक आहे. त्यासाठी त्या प्रश्नाच्या पुढे कसात 'दोन अचूक पर्याय निवडा' अशी सूचना दिलेली आहे.
- (7) 'दोन अचूक पर्याय निवडा' अशी सूचना दिलेल्या प्रश्नाव्यतिरिक्त इतर प्रत्येक प्रश्नासाठी एकापेक्षा अधिक चतुर्भुज नोंदविलेली उत्तरे व खाडाखोड करून नोंदविलेली उत्तरे ग्राह्य धरण्यात येणार नाहीत.
- (8) एकदा नोंदविलेली उत्तरे पुन्हा बदलता येणार नाहीत.
- (9) पर्यायाची उत्तरे नोंदविताना फक्त काळ्या किंवा निळ्या रंगाच्या बॉलपेनचाच वापर करावा. पेन्सिलने नोंदविलेली उत्तरे ग्राह्य धरण्यात येणार नाहीत.
- (10) प्रश्नपत्रिकेत प्रत्येक पानावर खाली व शेवटच्या पानावर कच्चे काम करण्यासाठी मोकळी जागा आहे, तेथेच कच्चे काम करावे.
- (11) परीक्षेस मर्यादित वेळ असल्याने एखाद्या प्रश्नाचे उत्तर तुम्हाला येत नसल्यास पुढील प्रश्न सोडवा. शेवटी वेळ शिल्लक राहिल्यास उरलेल्या प्रश्नासाठी पुन्हा प्रयत्न करावा.
- (12) एखाद्या प्रश्नात त्रुटी/चूक आढळल्यास त्याबाबत पर्यवेक्षक किंवा परीक्षा केंद्रसंचालक यांच्याकडे विचारणा करू नये.
- (13) प्रश्नातील त्रुटी/चूक आक्षेपाबाबतचे निवेदन शाळेने किंवा पालकानी गटशिक्षणाधिकारी किंवा शिक्षणाधिकारी यांच्याकडे लेखी स्वरूपात न पाठवता संबंधित शाळेच्या लॉगीन मधून ऑनलाईन पद्धतीनेच पाठवावे.
- (14) त्रुटी/चूक/आक्षेपाबाबतचे निवेदन ऑनलाईन पद्धतीने पाठविण्याची मुदत परीक्षा परीषदेच्या संकेतस्थळावर अंतरिम (तात्पुरती) उत्तरसूची प्रसिद्ध झाल्यापासून 10 (दहा) दिवसांपर्यंत राहिल.
- (15) मुद्रणदोष किंवा अन्य कारणांमुळे प्रश्न चुकीचा असल्याचे आढळल्यास तज्ञ समितीच्या अभिप्रायानुसार योग्य ती कार्यवाही केली जाईल.
- (16) मूळ माध्यमासोबत इंग्रजी भाषेतील प्रश्नपत्रिका दिलेली आहे. मूळ माध्यमातील संदिग्ध प्रश्नाबाबत इंग्रजी प्रश्न पहावेत.

## SECTION-I

**Instruction for Q. 1. :**

Ahmadabad, Feb. 15, 2016

A team of Indian and German scientists working near Bhuj in the Kutch region of Gujarat had found a big fossil of a dinosaur in hill in Lodai village. On Saturday they found more fossils. The new fossils include skull, jaw, and some teeth of dinosaur. A sample of fossils has been sent to Munich, Germany for further testing.

1. The above news tells us about.....

- (1) The scientists (2) Ahmadabad  
(3) Germany (4) Dinosaur fossils

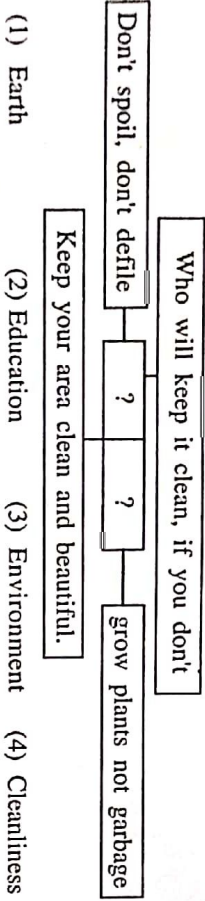
2. Complete the dialogue with correct option.

Meena :- I am getting ..... It's too cold here.

Mother :- Don't worry dear. I'll bring sweater for you.

- (1) Bored (2) Confused  
(3) Tired (4) Chilled to bone

3. Choose the correct option for the following slogans.  
The following slogans are about.....



SPACE FOR ROUGH WORK

**Instruction for Question No.- 4-6 :** Read the passage and choose the correct option.

Kabir was one of the great personalities in the history of our country. He lived hundreds of years ago, but his poems and teachings are sung with love and reverence even today. Hindus, Muslims, Sikhs, all think of him as a great Guru, teacher and religious figure. Kabir taught people devotion and humility. He wrote couplets and (dohas) and short poems. Though his compositions are short and simple they convey profound meaning and wisdom.

4. Choose the correct option.

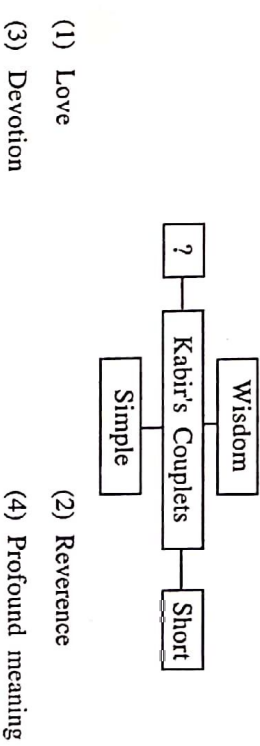
The passage tells us about.....

- (1) The history of our country  
(2) The information about Kabir-a saint poet  
(3) The different religion  
(4) Kabir's childhood

5. Which 'Hindi' word is mentioned in the passage?

- (1) Sung (2) Figure  
(3) Doha (4) Ago

6. Complete the web by choosing the correct word.



कव्या काव्याती फक्त



7. What is the mood in the following short-note ?

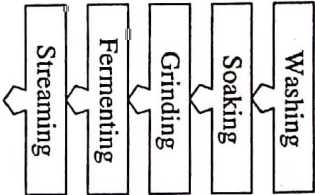
Choose the correct option.

I'm always there in your hour of need.

May his/her soul rest I peace. Words fall short to express my sorrow.

- (1) Happy (2) Surprise  
(3) Sad (4) Wonder

8. Read the following procedure and choose one correct alternative.  
These methods are used for .....



- (1) Washing cloths (2) Making idlis  
(3) Making rotis (4) Making desserts

9. Read the following riddle and choose one correct option.

I'm tall when I'm young.

I'm short when I'm old.

What am I ?

- (1) Tree (2) Candle  
(3) Egg (4) Stick

SPACE FOR ROUGH WORK

Instruction for Question No. 10-11 : Read the passage and choose the correct option.

Grate a couple of medium sized beetroots and soak them in a little water. After a while, you will get a beautiful dark pink-red colour. Add it to a bucketful of water. The red jaswand (hibiscus) flower will give you a deep red colour. Dry the petals of Zendu (marigold). Then you can powder them to get an orange colour. Even you can dry the leaves of neem, mint, coriander, spinach to get a dry green powder. If you crush or grind the fresh leaves you get dry colours and if you add the paste to water, you get wet colour. So talk to your mother to find out what other things in kitchen can give you safe natural colour. Let's celebrate holi with natural colour.

10. Match the pairs.

- | A                      | B                      |
|------------------------|------------------------|
| (1) Jaswand            | (a) Pink-red           |
| (2) Spinach            | (b) Deepred            |
| (3) Beetroot           | (c) Green              |
| (4) Marigold           | (d) Orange             |
| (1) 1-d; 2-b; 3-a; 4-c | (2) 1-b; 2-a; 3-c; 4-d |
| (3) 1-c; 2-d; 3-b; 4-a | (4) 1-a; 2-c; 3-a; 4-d |

11. Choose the correct option for the correct title to the passage.

- (1) Colours  
(2) Celebrate holi with natural colours  
(3) Celebration  
(4) Festivals are colourful

राष्ट्रवादी चळवळी

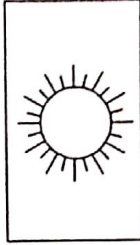
12. Choose the correct alternative.

Hishikesh was awarded as a 'best student of the year'. Find out three adjectives which suits him.

b	i	s	m	n	o
r	h	o	n	e	s
a	g	o	t	t	p
v	c	d	b	o	d
e	s	m	p	d	b
					q

- (1) Good, honest, brave
- (2) Big, quite, bad
- (3) Calm, nest, ago
- (4) Big, tall, ball

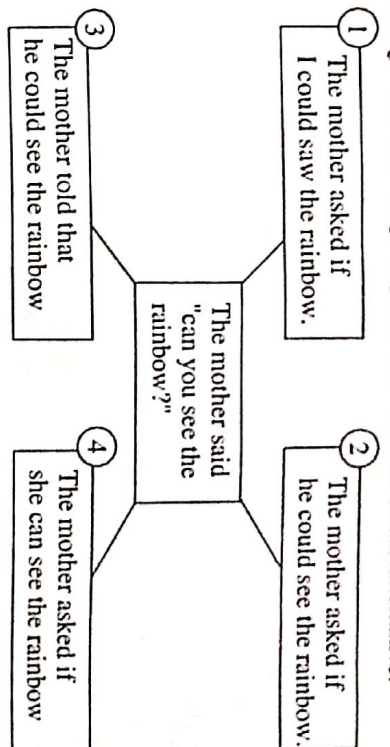
13. Choose the correct alternative from the following.



- (1) The sun is not as hot as tea
- (2) The candle is hotter than fire
- (3) The fire is hotter than candle
- (4) The candle is hotter than sun

SPACE FOR ROUGH WORK

14. Go through the following diagram and choose correct alternative.



- (1) 4
- (2) 1
- (3) 3
- (4) 2

15. Find out one correct alternative of type of tense of underlined word. When a farmer was returning home from the market, dark clouds gathered in the sky.

- (1) Simple past tense
- (2) Present continuous tense
- (3) Past continuous tense
- (4) Future continuous tense

16. Choose two correct alternatives for the following sentences which shows correct object and its active voice.

My toy had been taken away.

- (1) My sister had taken away my toys
- (2) My sister has taken away my toys
- (3) My sisters had taken away my toys
- (4) My sister taken away my toys.

कव्या काव्याची फक्त

17. Choose correct alternative.

If where: place. why: reason then when:.....

- (1) Quantity (2) Suggestion  
(3) Manner (4) Time

18. Choose the odd man out. Choose one correct alternative.

- (1) 3 (2) 4  
(3) 1 (4) 2
- can may must do  
(1) (2) (3) (4)

19. Choose one correct alternative of the following.

Last week grandfather wanted to visit Kashmir. He *booked* tickets.

- (1) Noun (2) Verb  
(3) Adverb (4) Adjective

20. Choose one correct alternative to form exclamatory sentence.

a / what / dream / it / horrible / is !

- (1) What a horrible dream it is! (2) What a dream horrible it is!  
(3) It is what a horrible dream! (4) What it is a horrible dream!

21. Choose the correct alternative. Find out the word which has not suffix.

(1)	(2)
Subscription	Mention
(3)	(4)
Description	Prescription

(1) 4 (2) 2  
(3) 3 (4) 1

SPACE FOR ROUGH WORK

22. Choose two correct alternative from the following.

Dinosaur were reptiles. There were many different types of dinosaurs. All dinosaurs did not look.....

- (1) Different (2) Similar  
(3) Unlike (4) Alike

23. Read the following sentences. Choose the correct alternative.

When Mr. Yadav gets back from his office, he expects his servant to have a hot meal waiting ..... him.

- (1) For (2) At  
(3) From (4) Of

24. Choose correct alternative from the following options.

Which word is related to 'eye'?

- (1) Cite (2) Site  
(3) Sit (4) Sight

25. Choose the correct alternative from the following options. Find the correct phrase.

Viraj is very good at Maths. He is a good singer. He is the champion of cricket. He loves swimming. He is .....

- (1) Very brave (2) Jack of all trades  
(3) Good at studies (4) Good friend

कठपुतली का पात्राती फलत



A	B	C	D	E	F	G	H	I	J	K	L	M	N	O	P	Q	R	S	T	U	V	W	X	Y
---	---	---	---	---	---	---	---	---	---	---	---	---	---	---	---	---	---	---	---	---	---	---	---	---

### SECTION-II

### INTELLIGENCE TEST

26. Form a meaningful word from the letters PTECSIROIND Use numerals 1, 2, ..... for every letter. Find the correct option from the following that makes a meaningful word from the word so formed.

- (1) 7, 5, 1 (2) 3, 1, 2 (3) 5, 2, 1 (4) 2, 4, 5

27. From the given alphabet series, choose the pair from the given options, which is at an equal distance from the 11th letter from the right. [select two correct alternatives]

- (1) D, R (2) F, X (3) J, T (4) P, F

Q. 28 and 29 Directions : Study the following number series and answer the questions that follow :

2 3 3 4 2 5 3 2 3 5 4 2 1 4 2 3 3 2 5 4 2 1 5 3 4 2 5 3 2 4 2 3

28. How many times an odd number is immediately followed by an even number but not preceded by even number.

- (1) Six (2) Four (3) Five (4) Seven

29. In the given number series, which number has occurred highest number of times ?

- (1) 4 (2) 3 (3) 2 (4) 5

SPACE FOR ROUGH WORK

A	B	C	D	E	F	G	H	I	J	K	L	M	N	O	P	Q	R	S	T	U	V	W	X	Y
---	---	---	---	---	---	---	---	---	---	---	---	---	---	---	---	---	---	---	---	---	---	---	---	---

### SECTION-II

### बुद्धिमत्ता चाचणी

26. 'म पा ग तं स' या पाच अक्षरांपासून तयार होणाऱ्या अर्धपूर्ण शाब्दातील कोणत्या क्रमांकाच्या अक्षरांपासून 'पात' या अर्थाचा शब्द तयार होईल?

- (1) 3 व 5 (2) 3 व 1 (3) 3 व 4 (4) 1 व 2

27. अक्षरमालेतील उजवीकडून अकराव्या अक्षरापासून समान अंतरावर असणाऱ्या अक्षरांचो जोडी कोणती? (दोन अवक पर्याय निवडा)

- (1) D, R (2) F, X (3) J, T (4) P, F

28 व 29 साठी पुढील अंकमाला अभ्यासा

2 3 3 4 2 5 3 2 3 5 4 2 1 4 2 3 3 2 5 4 2 1 5 3 4 2 5 3 2 4 2 3

28. दिलेल्या अंकमालेत विषम संख्येनंतर लगत सम संख्या आहे पण त्या विषम संख्येपूर्वी लगत सम संख्या नाही असे किती वेळ झाले आहे?

- (1) सहा (2) चार (3) पाच (4) सात

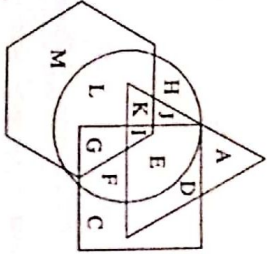
29. दिलेल्या अंकमालेत कोणता अंक सर्वाधिक वेळा आला आहे?

- (1) 4 (2) 3 (3) 2 (4) 5

कव्या कामासाठी फक्त

A	B	C	D	E	F	G	H	I	J	K	L	M	N	O	P	Q	R	S	T	U	V	W	X	Y
---	---	---	---	---	---	---	---	---	---	---	---	---	---	---	---	---	---	---	---	---	---	---	---	---

Q. 30 and 31 Directions : In the following venn diagram, triangle represents doctors, circle represents farmers, hexagon represents authors and quadrilateral represents carpenters.



30. Which of the following options indicate carpenters who are farmers.

- (1) JKLI (2) IIEFG (3) EFDG (4) HCLM

31. Which of the following letter indicates doctors who are only authors.

- (1) K (2) A  
(3) M (4) None of the above.

32. Find the position of the 7th letter which is to the left of 12th letter in the given alphabet series. [select two correct options]

- (1) 21st from right (2) 21st from left  
(3) 5st from right (4) 5st from left

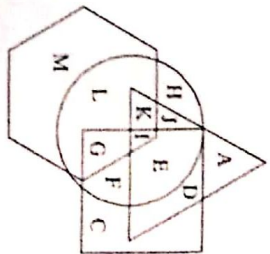
33. 150 streamers of different colours are arranged in a garland. The colours follow a specific sequence, red, yellow, green, blue, violet, white and orange. Which of the following option will not carry violet coloured stream ? [select the correct alternatives]

- (1) 68 (2) 89 (3) 115 (4) 94

SPACE FOR ROUGH WORK

A	B	C	D	E	F	G	H	I	J	K	L	M	N	O	P	Q	R	S	T	U	V	W	X	Y
---	---	---	---	---	---	---	---	---	---	---	---	---	---	---	---	---	---	---	---	---	---	---	---	---

30 व 31 साठी शेजारच्या वेन आकृतीतील त्रिकोणान डॉक्टर, वर्तुळात शेतकरी, षटकोनात लेखक आणि चौकोनात सुतार दाखवले आहेत.



30. शेती करणारे सुतार कोणत्या अक्षरांनी दाखवले आहेत?

- (1) JKLI (2) IIEFC (3) EFDG (4) HCLM

31. फक्त लेखन करणारे डॉक्टर कोणत्या अक्षरांनी दाखवले आहेत?

- (1) K (2) A (3) M (4) कोणत्याही नाही

32. अक्षरमालेतील चारव्या अक्षराच्या डावीकडील सातव्या अक्षराचे स्थान पर्यायातून निवडा. (दोन अचूक पर्याय निवडा)

- (1) उजवीकडून एकविसावे (2) डावीकडून एकविसावे  
(3) उजवीकडून पाचवे (4) डावीकडून पाचवे

33. एका दोऱ्याला अनुक्रमे तांबडी, निवडी, हिरवी, निळी, जांभडी, पांढरी व कैशरी या प्रमाणे 150 पताका चिकटवल्या आहेत तर पर्यायांमधील कोणत्या क्रमांकावर जांभड्या रंगाची पताका असणार नाही? (दोन अचूक पर्याय निवडा)

- (1) 68 (2) 89 (3) 115 (4) 94

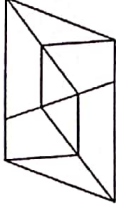
कच्चा कामासाठी फक्त

A	B	C	D	E	F	G	H	I	J	K	L	M	N	O	P	Q	R	S	T	U	V	W	X	Y
---	---	---	---	---	---	---	---	---	---	---	---	---	---	---	---	---	---	---	---	---	---	---	---	---

34. Akshay is younger than Vishal by 125 days. Akshay is born on Saturday. 13th Aug. On which day was vishal born ?

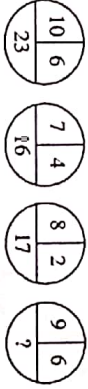
- (1) Sunday, 10th April
- (2) Friday, 16th December
- (3) Sunday, 9th April
- (4) Thursday 15th December.

35. Find the number of quadrilaterals in the given figure.



- (1) 12
- (2) 8
- (3) 17
- (4) 14

36. In the following series, determine the rule and find out the term in place of the question mark.



- (1) 18
- (2) 21
- (3) 26
- (4) 23

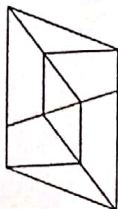
SPACE FOR ROUGH WORK

A	B	C	D	E	F	G	H	I	J	K	L	M	N	O	P	Q	R	S	T	U	V	W	X	Y
---	---	---	---	---	---	---	---	---	---	---	---	---	---	---	---	---	---	---	---	---	---	---	---	---

34. विशालपेक्षा अक्षय 125 दिवसांनी लहान आहे. जर अक्षयचा जन्म 13 ऑगस्ट, शनिवारी झाला असेल तर विशालचा जन्म कोणत्या दिवशी झाला असेल?

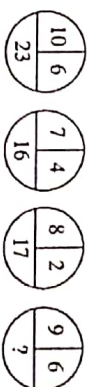
- (1) 10 एप्रिल, रविवारी
- (2) 16 डिसेंबर, शुक्रवारी
- (3) 9 एप्रिल, शनिवारी
- (4) 15 डिसेंबर, गुरूवारी

35. शेजारी दिलेल्या आकृतीतील चौकोनांची एकूण संख्या किती आहे?



- (1) 12
- (2) 8
- (3) 17
- (4) 14

36. संख्यांच्या मांडणीतील सूत्र ओळखून प्रश्न चिन्हाच्या जागीचा पर्याय निवडा.



- (1) 18
- (2) 21
- (3) 26
- (4) 23

कच्च्या कामासाठी फक्त



A	B	C	D	E	F	G	H	I	J	K	L	M	N	O	P	Q	R	S	T	U	V	W	X	Y
---	---	---	---	---	---	---	---	---	---	---	---	---	---	---	---	---	---	---	---	---	---	---	---	---

Q. 37 to 39 Directions : Identify the rhythmic arrangement of terms given below and find the correct term in place of the question mark.

37. M S T U N U N M S T S T U N M N M S T ? ? N M S  
(1) UTU (2) STM (3) UTS (4) MSU
38. 4 2 5 7 1 8 6 8 1 7 5 2 4 2 5 7 1 8 ? 7 5 2 ? 7 1 7 5 ?  
(1) 1, 8, 7 (2) 2, 5, 7 (3) 1, 2, 5 (4) 1, 5, 7
39.  $\square \star \Delta + \bigcirc \times \star \square \Delta + \times \bigcirc \star \Delta \square \times + \bigcirc ? ? ? ? + \bigcirc$   
(1)  $\star \square \times \Delta$  (2)  $\Delta \star \times \square$   
(3)  $\star \Delta \times \square$  (4)  $\star \Delta + \square$
40. Pramod's present age is double of Amir's present age. Pramod is younger by 2 years than double the age of Sarvesh, but Harshal is elder by three years. Krishna, who is elder by three years than Harshal was 14 last year. If these are arranged in ascending order of their ages who will be at the center ?  
(1) Pramod (2) Sarvesh (3) Krishna (4) Harshal
41. In a certain code language 'SOON' is written as 'OOSN', 'APPLE' is written as 'PPALE', then how will you write 'TEETH' in the same code language ?  
(1) EETHT (2) ETTEH (3) EETTH (4) EHTTE
42. A bus started at 6.40 a.m. travels at a speed of 45km/hr. At what time it will reach another place which is at a distance of 375 km ?  
(1) 2.55 p.m (2) 3.00 p.m (3) 3.05 p.m (4) 2.50 p.m

SPACE FOR ROUGH WORK

A	B	C	D	E	F	G	H	I	J	K	L	M	N	O	P	Q	R	S	T	U	V	W	X	Y
---	---	---	---	---	---	---	---	---	---	---	---	---	---	---	---	---	---	---	---	---	---	---	---	---

37 ते 39 मध्ये दिलेल्या लयबद्ध मांडणीतील पदांचा क्रम लक्षात घेऊन प्रश्नचिन्हाच्या जागी घेणारे पद पर्यायातून निवडा

37. M S T U N U N M S T S T U N M N M S T ? ? N M S  
(1) UTU (2) STM (3) UTS (4) MSU
38. ४ २ ५ ७ १ ८ ६ ८ १ ७ ५ २ ४ २ ५ ७ १ ८ ? ७ ५ २ ? ७ १ ७ ५ ?  
(1) १, ८, ७ (2) २, ५, ७ (3) १, २, ५ (4) १, ५, ७
39.  $\square \star \Delta + \bigcirc \times \star \square \Delta + \times \bigcirc \star \Delta \square \times + \bigcirc ? ? ? ? + \bigcirc$   
(1)  $\star \square \times \Delta$  (2)  $\Delta \star \times \square$   
(3)  $\star \Delta \times \square$  (4)  $\star \Delta + \square$
40. आजच्या अमीरच्या वयाच्या दुप्पट वय प्रमोदचे आहे. सर्वेपच्या दुपटीहून दोन वर्षांनी कमी वय प्रमोदचे तर तीन वर्षांनी अधिक वयाचा हर्षल आहे. हर्षलपेक्षा तीन वर्षांनी मोठा असणाऱ्या कृष्णाचे गतवर्षीचे वय 14 वर्षे असेल तर आज वयाच्या चढत्या क्रमाने मध्यभागी कोण असेल ?  
(1) प्रमोद (2) सर्वेप (3) कृष्ण (4) हर्षल
41. एका सांकेतिक भाषेत 'सावधान' हा शब्द 'ष ल द धा' असा लिहितात, 'परात' हा शब्द 'नयणा' असा लिहितात तर त्याच भाषेत 'पसायदान' हा शब्द कसा लिहिता ?  
(1) नायमादधा (2) नयमाधधा (3) नायमाधधा (4) नारामाधधा
42. स. 6.40 वा. सुटलेली ताशी 45 किमी. वेगाने थावणारी बस 375 किमी अंतरावरील गावी किती वाजता पोहोचेल ?  
(1) रु. 2.55 वा (2) रु. 3 वा  
(3) रु. 3.05 वा (4) रु. 2.50 वा

कच्चा कामासाठी फक्त

A	B	C	D	E	F	G	H	I	J	K	L	M	N	O	P	Q	R	S	T	U	V	W	X	Y
---	---	---	---	---	---	---	---	---	---	---	---	---	---	---	---	---	---	---	---	---	---	---	---	---

Q. 43 to 47 Directions- In each of the following questions, relation between 3rd and 4th term is the same as that of between the first and the second. Find the term to replace the question mark.

43. Equal : Congruent :: Characteristics : ?

(Select two correct alternatives)

- (1) Features (2) Personality (3) Properties (4) terms

44. Water :  $H_2O$  :: Salt : ?

- (1) KCl (2) NaOH (3) NaCl (4) HCl


45. 253 : 450 :: 341 : ? [Select two correct alternatives]

- (1) 360 (2) 512 (3) 146 (4) 72

46. MOQ : PRU :: ? : NPS

- (1) UWY (2) KMO (3) JHF (4) JLP.

47.



SPACE FOR ROUGH WORK

A	B	C	D	E	F	G	H	I	J	K	L	M	N	O	P	Q	R	S	T	U	V	W	X	Y
---	---	---	---	---	---	---	---	---	---	---	---	---	---	---	---	---	---	---	---	---	---	---	---	---

प्र. 43 ते 47 मध्ये पहिल्या दोन पदंतीत संबंध ओळखून तिसऱ्या पदाचा चौथ्या पदंतीत तोच संबंध लावून प्रश्नचिन्हाच्या जागीचा पर्याय निवडा.

43. रसना : जीभ :: पादप : ? (दोन अचूक पर्याय निवडा)

- (1) हुम (2) अक्षी (3) तरू (4) नग

44. पाणी :  $H_2O$  :: मीठ : ?

- (1) KCl (2) NaOH (3) NaCl (4) HCl


45. 253 : 450 :: 341 : ? (दोन अचूक पर्याय निवडा)

- (1) 360 (2) 512 (3) 146 (4) 72

46. MOQ : PRU :: ? : NPS

- (1) UWY (2) KMO (3) JHF (4) JLP.

47.



कच्चा कामसाठी फक्त









A	B	C	D	E	F	G	H	I	J	K	L	M	N	O	P	Q	R	S	T	U	V	W	X	Y
---	---	---	---	---	---	---	---	---	---	---	---	---	---	---	---	---	---	---	---	---	---	---	---	---

Q. 58 and 59 Directions- A, B, C, D, E, F, G, H are the eight boys standing in a circle facing each other, at an equal distance. D is standing next to A to his right and E is in front of him. B is standing next to H, to his right and is in front of G. In front of C, to the south D is standing; but F is not next to D.

58. Which direction H is facing ?

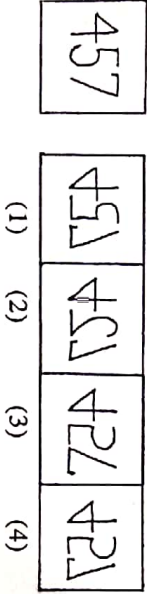
- (1) North-East (2) South-West  
(3) South-East (4) North-West

59. Who is standing to the East ?

- (1) C (2) B (3) G (4) H

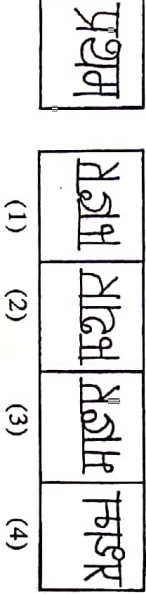
Q. 60 and 61 Directions- In the following questions a question figure is given, Identify its water image from the given alternatives.

60. Question Figure Answer Figure



- (1) (2) (3) (4)

61. Question Figure Answer Figure



- (1) (2) (3) (4)

SPACE FOR ROUGH WORK

A	B	C	D	E	F	G	H	I	J	K	L	M	N	O	P	Q	R	S	T	U	V	W	X	Y
---	---	---	---	---	---	---	---	---	---	---	---	---	---	---	---	---	---	---	---	---	---	---	---	---

58 व 59 सारकी- एका वर्तुळाकार मैदानावर कडेने अ, ब, क, ड, इ, फ, ग, ज, ही आठ मुले समान अंतरावर आठ तोंडे करू उभी आहेत. त्यांत 'अ' च्या उजव्या बाजूला लागत 'ड' असून समोर 'इ' उभा आहे. 'ब' हा 'ज' च्या उजव्या बाजूला लागत असून तो 'ग' च्या समोर आहे. 'क' च्या समोर दक्षिणेला 'ड' उभा आहे पण 'इ' च्या शेजारी 'फ' नाही.

58. 'ज' च्या समोरची दिशा कोणती आहे?

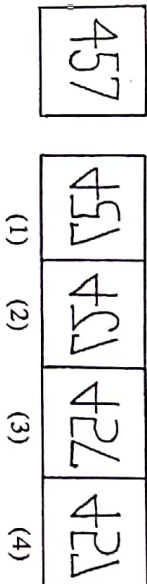
- (1) ईशान्य (2) नैऋत्य  
(3) आग्नेय (4) वायव्य

59. पूर्व दिशेला कोण उभा आहे?

- (1) क (2) ब (3) ग (4) ज

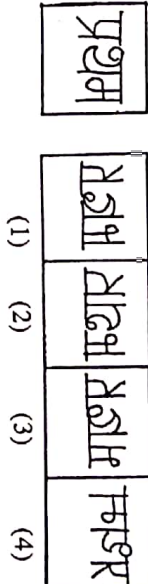
60 व 61 मध्ये प्रश्नकृतीचे जलप्रतिबिंब पर्यायातून निवडा

60. प्रश्नकृती उत्तर आकृती



- (1) (2) (3) (4)

61. प्रश्नकृती उत्तर आकृती



- (1) (2) (3) (4)

कच्च्या कामासाठी फक्त

A	B	C	D	E	F	G	H	I	J	K	L	M	N	O	P	Q	R	S	T	U	V	W	X	Y
---	---	---	---	---	---	---	---	---	---	---	---	---	---	---	---	---	---	---	---	---	---	---	---	---

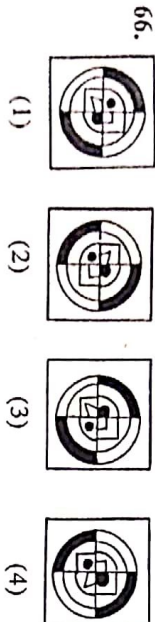
Q. 62 to 66 Directions- Find the odd term.

62. (1) Hour-our (2) Cloth-clothe  
(3) There-their (4) Seen-scene

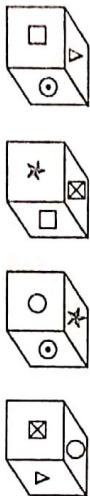
63. (1) 327 (2) 844  
(3) 532 (4) 627

64. (1) Italy-Rome (2) Germany-Berlin  
(3) U.S.A-New York (4) Egypt-Cairo

65. (1) ADH (2) RYV  
(3) KNR (4) FIM



67. Different Faces of a cube with symbols □, ○, △, ★, ☒, and ⊙ are given below. Symbols on opposite faces are given in the alternatives. Which alternative shows the symbols that are not on the opposite faces.



- (1) □ and ○ (2) △ and ★ (3) ☒ and ⊙ (4) ○ and ☒

SPACE FOR ROUGH WORK

A	B	C	D	E	F	G	H	I	J	K	L	M	N	O	P	Q	R	S	T	U	V	W	X	Y
---	---	---	---	---	---	---	---	---	---	---	---	---	---	---	---	---	---	---	---	---	---	---	---	---

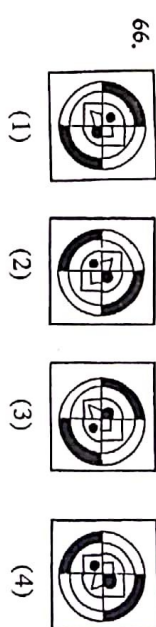
62 व 66 मध्ये गटात न वसणारे पर निवडा.

62. (1) कुडी (2) कर  
(3) वपू (4) अंग

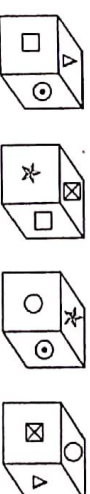
63. (1) 327 (2) 844  
(3) 532 (4) 627

64. (1) इटली-रोम (2) जर्मनी-बर्लिन  
(3) अमेरिकेची संयुक्त संस्थाने-न्यूयॉर्क (4) इजिप्त-कैरो

65. (1) ADH (2) RYV  
(3) KNR (4) FIM



67. एकाच घनाच्या पृष्ठांवर □, ○, △, ★, ☒, व ⊙ ही चिन्हे असलेल्या विविध बाजू खाली दाखवल्या आहेत. त्यात समोरासमोरेल पृष्ठांवर असलेल्या चिन्हांच्या जोड्या पर्यायांत दाखवल्या आहेत. त्यापैकी कोणत्या पर्यायातील चिन्हांची जोडी समोरासमोरेल पृष्ठांवर येणार नाही?



- (1) □ व ○ (2) △ व ★ (3) ☒ व ⊙ (4) ○ व ☒

कच्च्या कामासाठी फक्त



A	B	C	D	E	F	G	H	I	J	K	L	M	N	O	P	Q	R	S	T	U	V	W	X	Y
---	---	---	---	---	---	---	---	---	---	---	---	---	---	---	---	---	---	---	---	---	---	---	---	---

68. From the following number series, find the odd term.  
12, 15, 20, 23, 28, 34, 38, 45

- (1) 34 (2) 20 (3) 28 (4) 45

Q. 69 and 70 Directions- In a certain code language 'I eat chappati' is written as BAN, 'I sell books' is written as CNO and 'Amar reads books' is written as OBM. Then.

69. Which letter is used for the word 'sell' ?

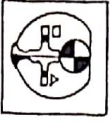
- (1) N (2) O (3) C (4) A

70. Which letter is used for the word 'I' ?

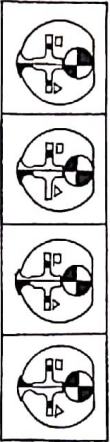
- (1) B (2) C (3) O (4) N

Q. 71 and 72 Directions-Choose the correct figure from the alternatives which exactly matches with the question figure.

71. Question Figure Answer Figure



- (1) (2) (3) (4)



72. Question Figure Answer Figure



- (1) (2) (3) (4)



SPACE FOR ROUGH WORK

A	B	C	D	E	F	G	H	I	J	K	L	M	N	O	P	Q	R	S	T	U	V	W	X	Y
---	---	---	---	---	---	---	---	---	---	---	---	---	---	---	---	---	---	---	---	---	---	---	---	---

68. संख्यामालिकेतील चुकीचे पद पर्यायातून निवडा.

12, 15, 20, 23, 28, 34, 38, 45

- (1) 34 (2) 20 (3) 28 (4) 45

प्र. 69 व 70 साठी- एका सांकेतिक भाषेत 'मी आंबा खातो.' हे वाक्य BAN असे लिहितात, 'मी भाजी खातो.' हे वाक्य CNO असे लिहितात. आणि 'दादा भाजी खातो. हे वाक्य' OBM असे लिहितात. तर.....

69. 'कलो' या शब्दासाठी कोणते सांकेतिक अक्षर आले आहे?

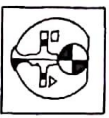
- (1) N (2) O (3) C (4) N

70. 'मी' या शब्दासाठी कोणते सांकेतिक अक्षर आले आहे?

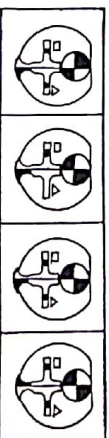
- (1) B (2) C (3) O (4) N

प्र. 71 व 72 साठी-

71. प्रश्नाकृतीशी तत्सम जुळणारी आकृती पर्यायातून निवडा.



- (1) (2) (3) (4)



72. प्रश्नाकृतीशी तत्सम जुळणारी आकृती पर्यायातून निवडा.



- (1) (2) (3) (4)



कळ्या कामासाठी फक्त

A	B	C	D	E	F	G	H	I	J	K	L	M	N	O	P	Q	R	S	T	U	V	W	X	Y
---	---	---	---	---	---	---	---	---	---	---	---	---	---	---	---	---	---	---	---	---	---	---	---	---

73. A square sheet of paper is folded and cut as shown in the question figure. How will the figure look like when the paper is unfolded. Choose the correct alternative.



- (1) (2) (3) (4)

74. Find the hidden part of the question figure from the alternatives given.



- (1) (2) (3) (4)

75. Choose the correct alternative to complete the question figure.



- (1) (2) (3) (4)

SPACE FOR ROUGH WORK

A	B	C	D	E	F	G	H	I	J	K	L	M	N	O	P	Q	R	S	T	U	V	W	X	Y
---	---	---	---	---	---	---	---	---	---	---	---	---	---	---	---	---	---	---	---	---	---	---	---	---

73. प्रश्नाकृतीतील कागदाचा घडी घालून विशिष्ट ठिकाणी त्याला घेतलेले काप दाखवते आहेत तो कागद उलगडल्यावर कोणत्या आकृतीप्रमाणे दिसेल?



- (1) (2) (3) (4)

74. प्रश्नाकृतीत लपलेला भाग पर्यायातून निवडा



- (1) (2) (3) (4)

75. दिलेली अपूर्ण प्रश्नाकृती पूर्ण करण्यासाठी योग्य पर्याय निवडा.



- (1) (2) (3) (4)

करव्या कामासाठी फक्त